

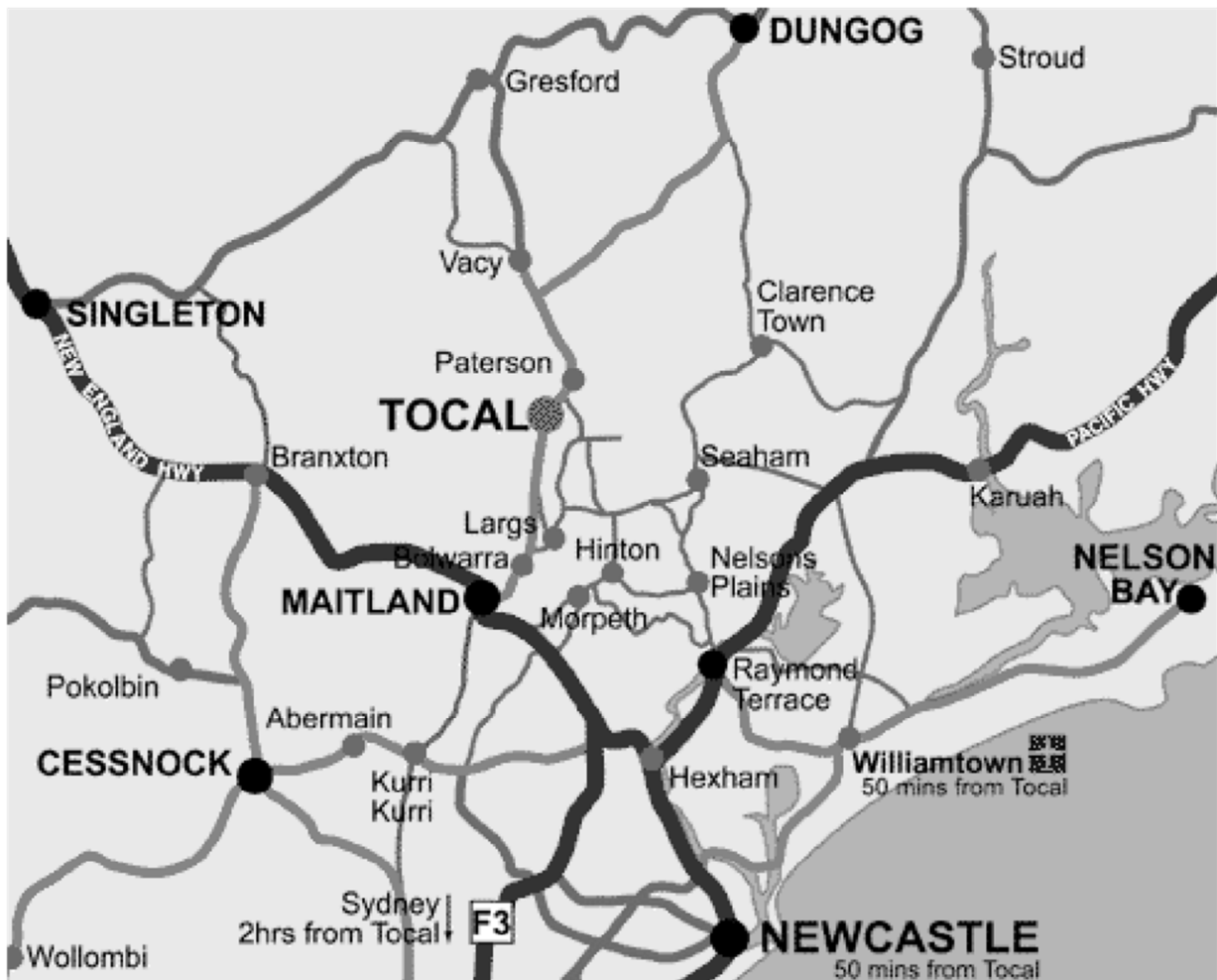
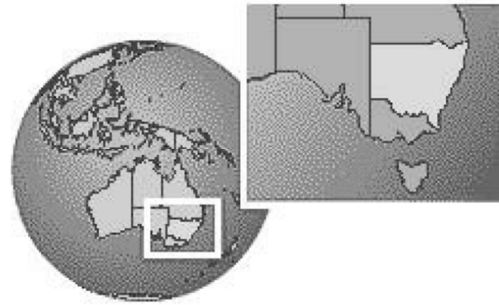
Geography of the Tocal Field Days

ACTIVITY ONE


On the two maps below, mark the location of the Tocal Field Days. Also add the following information on the larger map;

Stage 2
GE2-2
GE2-1
GE2-4

- The state Tocal Field Days is located in
- The name and location of the closest river
- Draw arrow indicating the four compass points (north, south, east and west)
- Identify the first town north of Tocal
- Identify the first town south of Tocal
- Indicate the direction of the Great Dividing Range from Tocal Field Days



4. On the timeline below, mark how this feature has changed over the last 100 years.



5. Ask a visitor to Tocal Field Days or a staff member at Tocal Field Days what they think is special about the feature you have selected.

6. Name three things that could negatively impact on your feature and explain why?

i.

ii.

iii.

7. Name three things that could help improve or protect your feature in the future?

i.

ii.

iii.

8. Why do you think this feature is significant? Be prepared to tell your class!